

What can we learn from Newton's estimate of $\ln(2)$ and π ?

University of Idaho
Monday September 26, 2016

Martin Flashman
Department of Mathematics
Humboldt State University
flashman@humboldt.edu

Abstract

Newton made a very accurate estimate for the hyperbolic logarithm of 2 by combining understanding of properties of logarithms, the geometric series, and integration for polynomials.

The author will analyze Newton's approach and explore how this approach might be better understood by students by asking for an estimate of pi using the fact that

$$\arctan\left(\frac{1}{2}\right) + \arctan\left(\frac{1}{3}\right) = \frac{\pi}{4}.$$

Outline

- I. Analyze the approach used by Isaac Newton in his 16 decimal place estimate for the natural logarithm of 2 which appeared in “*The method of fluxions and infinite series*” [1671/1736]
- II. Examine briefly Newton’s estimate of π in the same publication to see how it follows a somewhat similar approach.
- III. Follow Newton’s approach from the logarithm more schematically by asking for an estimate of π using the fact

$$\arctan\left(\frac{1}{2}\right) + \arctan\left(\frac{1}{3}\right) = \frac{\pi}{4}.$$

Part I. Newton's computations of hyperbolic logarithms.

- In 1676 Newton wrote in a letter to Henry Oldenburg on some of his applications of series to estimating areas, in particular in estimating areas for the hyperbolic logarithm.
- This work was later clarified in *Of the Method of Fluxions and Infinite Series* which was published posthumously in 1737, ten years after Newton's death.

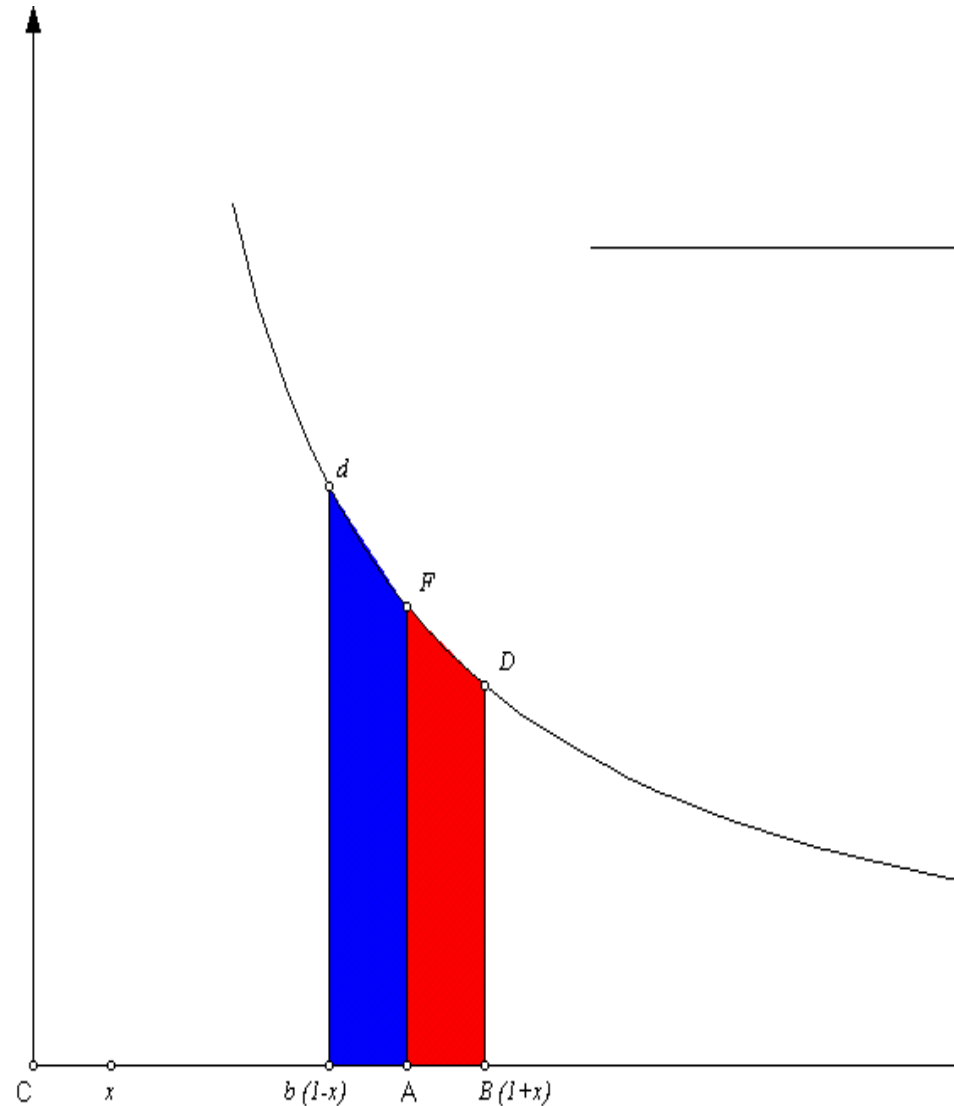


Newton estimates the Hyperbolic Log

Newton considers symmetrically located points on the main axis, $1 + x$ and $1 - x$ with $x > 0$ and their related reciprocals.

He then uses two integrals related to the geometric series to determine the related areas,

- (i) between the hyperbola and above the segment $[1, 1 + x]$ (red) AFDB and
- (ii) between the hyperbola and above the segment $[1 - x, 1]$ (blue) AFdb.



Newton estimates the Hyperbolic Log

The integrals to determine the related areas,

(i) between the hyperbola and above the segment $[1, 1 + h]$ (red) AFDB

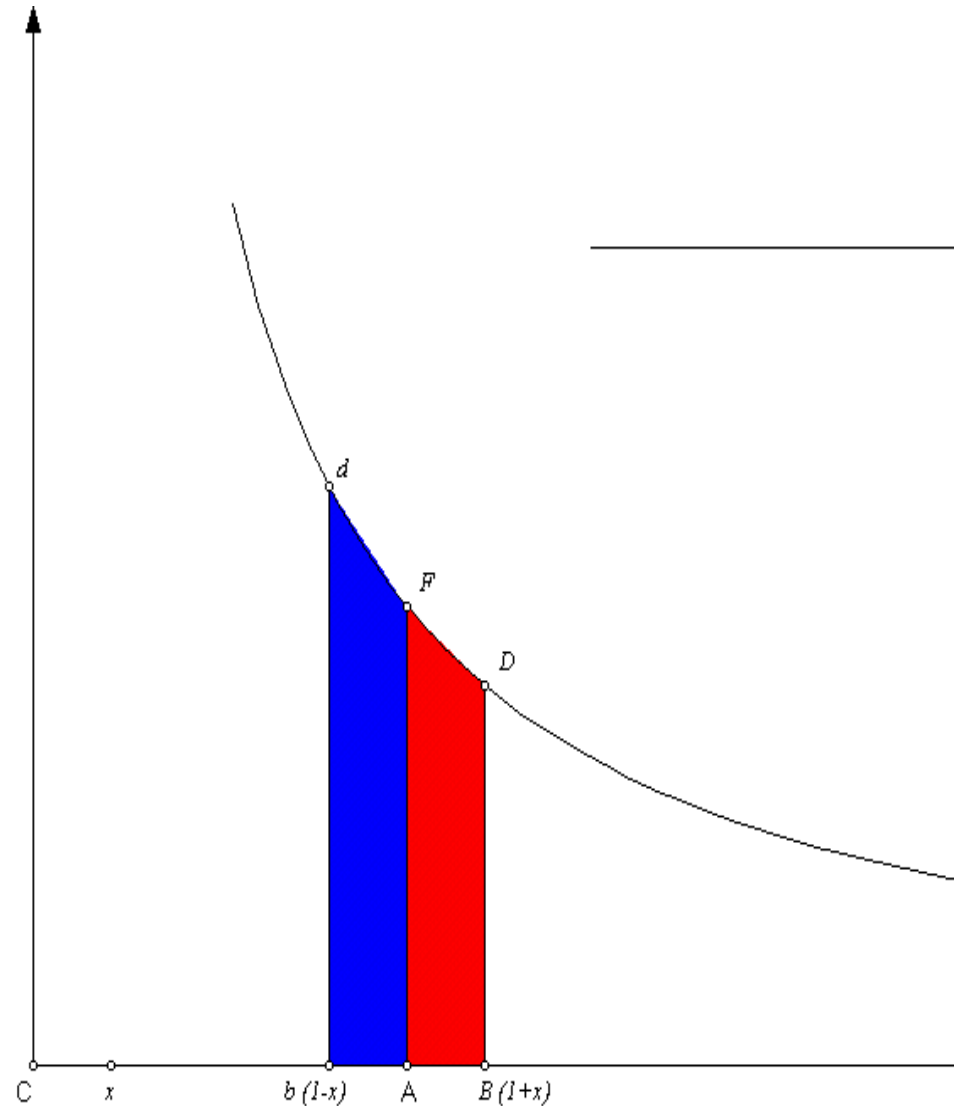
$$\int_1^{1+h} \frac{1}{x} dx = \int_0^h \frac{1}{1+x} dx$$

$$[u = x + 1]$$

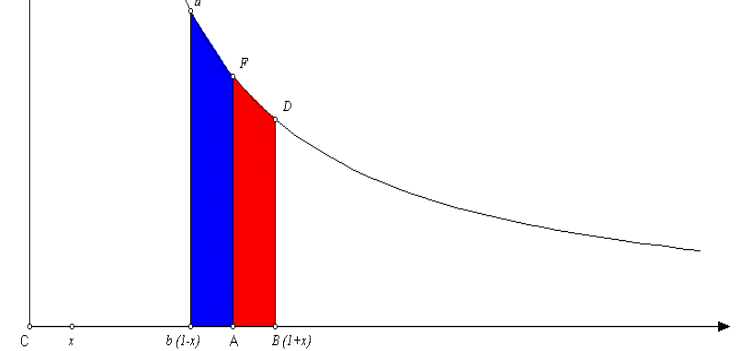
(ii) between the hyperbola and above the segment $[1 - h, 1]$ (blue) Afdb

$$\int_{1-h}^1 \frac{1}{x} dx = \int_0^h \frac{1}{1-x} dx$$

$$[u = 1 - x]$$



The red and the blue.



$$\text{Area } AFDB = \int_0^k \frac{l}{l+x} dx = \int_0^k l - x + x^2 - x^3 + \dots = h - \frac{h^2}{2} + \frac{h^3}{3} - \frac{h^4}{4} \dots$$

$$\text{Area } AFdb = \int_0^k \frac{l}{l-x} dx = \int_0^k l + x + x^2 + \dots + x^k + \dots = h + \frac{h^2}{2} + \frac{h^3}{3} + \dots + \frac{h^k}{k} + \dots$$

These allow the estimation of the sum and difference of the two areas:

$$\text{Total area } bdDB = 2h + 2\frac{h^3}{3} + 2\frac{h^5}{5} + 2\frac{h^7}{7} + \dots$$

$$\text{Difference of areas } Ad - AD = h^2 + \frac{h^4}{2} + \frac{h^6}{3} + \frac{h^8}{4} + \dots$$

Now to find the Area of the two separate regions (and related logarithms) we take $1/2$ of the difference of these results and $1/2$ of the sum of these results.

- Newton uses the first eight terms with $h = .1$ and $h = .2$ to estimate *the hyperbolic (natural) logarithm* of

0.9, 1.1 , 0.8 *and* 1.2

Sum of Areas

h	0.1	.2
2h	0.2	0.4
$2h^3/3$	0.0006666666666666	0.005333333333333
$2h^5/5$	0.000004	0.000128
$2h^7/7$	0.0000000285714286	0.00000365714285714
$2h^9/9$	0.0000000002222222	0.00000011377777778
$2h^{11}/11$	0.0000000000018182	0.00000000372363636
$2h^{13}/13$	0.0000000000000154	0.00000000012603077
$2h^{15}/15$	0.0000000000000001	0.00000000000436907
Sum of Areas	0.200670695462151	0.405465108108002

Difference of Areas

h	0.1	.2
h^2	0.01	0.04
$h^4/2$	0.00005	0.0008
$h^6/3$	0.0000003333333333	0.00002133333333
$h^8/4$	0.0000000025	0.00000064
$h^{10}/5$	0.00000000002	0.00000002048
$h^{12}/6$	0.0000000000001667	0.00000000068267
$h^{14}/7$	0.0000000000000014	0.00000000002341
Diff'ce of Areas	0.010050335853501	0.040821994519406

The Area of the two separate regions(and related logarithms)

1/2 of the difference of these results and 1/2 of the sum of the results.

$$\ln(1.1) \approx \frac{1}{2} (0.2006706954621511 - 0.0100503358535014)$$

$$\approx 0.0953101798043248$$

$$\ln(.9) \approx -\frac{1}{2}(0.2006706954621511 + 0.0100503358535014)$$

$$\approx -0.105360516578263 .$$

$$\ln(1.2) \approx \frac{1}{2} (0.405465108108002 - 0.040821994519406)$$

$$\approx 0.18232155576939546 \text{ (from Newton)}$$

$$\ln(.8) \approx -\frac{1}{2}(0.405465108108002 + 0.040821994519406)$$

$$\approx -0.2231435513142097 \text{ (from Newton)} .$$

Final calculations for $\ln(2)$

$$\ln(2) = \ln\left(\frac{1.2}{.8} \frac{1.2}{.9}\right) = 2 \ln(1.2) - (\ln(.9) + \ln(.8))$$

$$\approx 2(0.18232155576939546)$$

$$+ 0.105360516578263 + 0.2231435513142097$$

$$= 0.6931471805599453 \text{ (from Newton)}$$

Comparison

$\ln(2)$ from Newton:

0.6931471805599453

$\ln(2)$ from calculator:

**0.69314718055994530941
723212145818**

From Newton

From Newton, *Of the Method of Fluxions and Infinite Series* , pp 132-133.

[Newton_on PI.pdf](#)

ing these numbers for a , b , and x , the first term of the series becomes 0.2, the second 0.0006666666666666, &c. the third 0.000004, and so on; as you see in this table.

$$\begin{array}{r}
 0.2000000000000000 \\
 6666666666666666 \\
 4000000000000000 \\
 285714286 \\
 2222222 \\
 18182 \\
 154 \\
 1
 \end{array}$$

$$0.2006706954621511 = \text{Area } bdDB.$$

If the parts of this Area Ad and AD be added separately, subtract the lesser DA from the greater dA , and there will remain $\frac{bx^2}{a} + \frac{bx^4}{2a^3} + \frac{bx^6}{3a^5} + \frac{bx^8}{4a^7}$, &c. where, if 1 be wrote for a and b , and $\frac{1}{x}$ for x , the terms being reduced to decimals will stand thus.

$$\begin{array}{r}
 0.0100000000000000 \\
 5000000000000000 \\
 3333333333 \\
 25000000 \\
 200000 \\
 1667 \\
 14
 \end{array}$$

$$0.0100503358535014 = Ad - AD.$$

Now if this difference of the Areas be added to, and subtracted from, their sum before found; half the aggregate 0.1053605156578263 will be the greater

greater Area Ad ; and half the remainder 0.0953101798043248 will be the lesser Area AD .

By the same tables these Areas AD and Ad will be obtained also, when AB and Ab are supposed $\frac{1}{10}$, or $CB = 1.01$, and $Cb = 0.99$; if the numbers are but duly transferred to lower places. As

$$\begin{array}{r}
 0.0200000000000000 \\
 6666666666666666 \\
 4000000 \\
 28 \\
 \hline
 \text{Sum } 0.020006667066695 = bD
 \end{array}
 \qquad
 \begin{array}{r}
 0.0001000000000000 \\
 50000000 \\
 3113 \\
 \hline
 0.0001000030003333 = Ad - AD
 \end{array}$$

Half the aggregate 0.0100503358535014 = Ad and Half the residue 0.0099503308531681 = AD .

And so putting AB and $Ab = \frac{1}{100}$, or $CB = 1.001$, and $Cb = 0.999$, there will be obtained $Ad = 0.00100050003335835$ and $AD = 0.0009950013330835$.

In the same manner (if CA and $AF = 1$) putting AB and $Ab = 0.2$, or 0.02, or 0.002, these areas will arise.

$$\begin{array}{ll}
 Ad = 0.223143553142097 & \text{and } AD = 0.1823215576939546 \\
 \text{or } Ad = 0.0202027073175194 & \text{and } AD = 0.0198026272961797 \\
 \text{or } Ad = 0.002002 & \text{and } AD = 0.001
 \end{array}$$

From these Areas thus found it will be easy to derive others by addition and subtraction alone, for as it is $\frac{1.2}{0.8} \times \frac{1.2}{0.9} = 2$; the sum of the areas 0.6931471805599453 belonging to the ratios $\frac{1.2}{0.8}$ and $\frac{1.2}{0.9}$ (that is inscribing upon the parts of the absciss 1.2, 0.8. and 1.2, 0.9.) will be the area $AF\delta\beta$, when $C\beta = 2$; as is known. Again, since $\frac{1.2}{0.8} \times 2 = 3$, the sum 1.0986122886681097

Summary Analysis of Computation

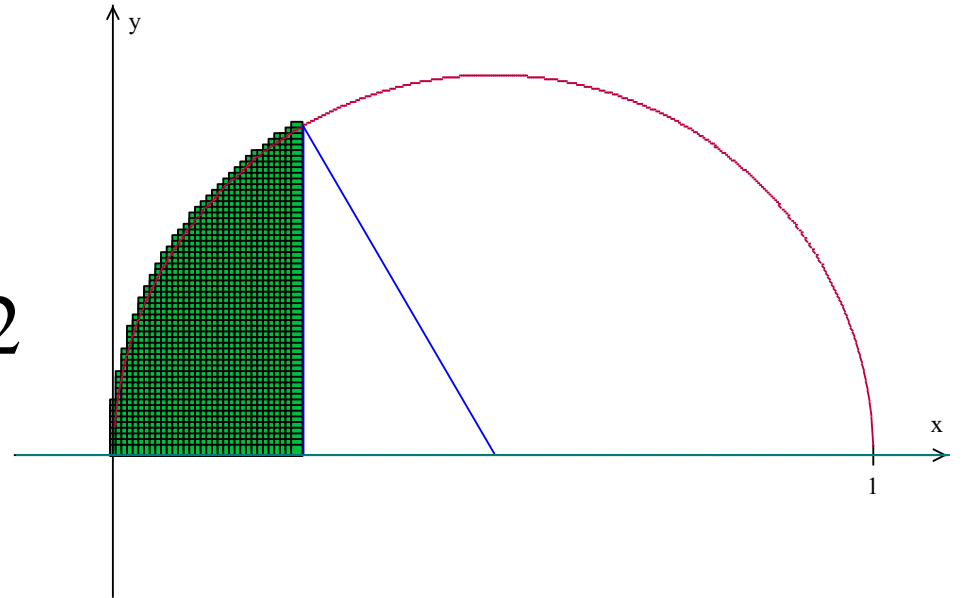
1. Use of geometric “series and polynomials” to estimate $\frac{1}{1+x}$ and $\frac{1}{1-x}$ when $x \approx 0$.
2. Integration of polynomials.
3. Geometry and algebra to decompose and recover estimates.
4. Algebra of logarithmic function.

$$\ln\left(\frac{A^2}{C * D}\right) = 2\ln(A) - (\ln(C) + \ln(D)).$$

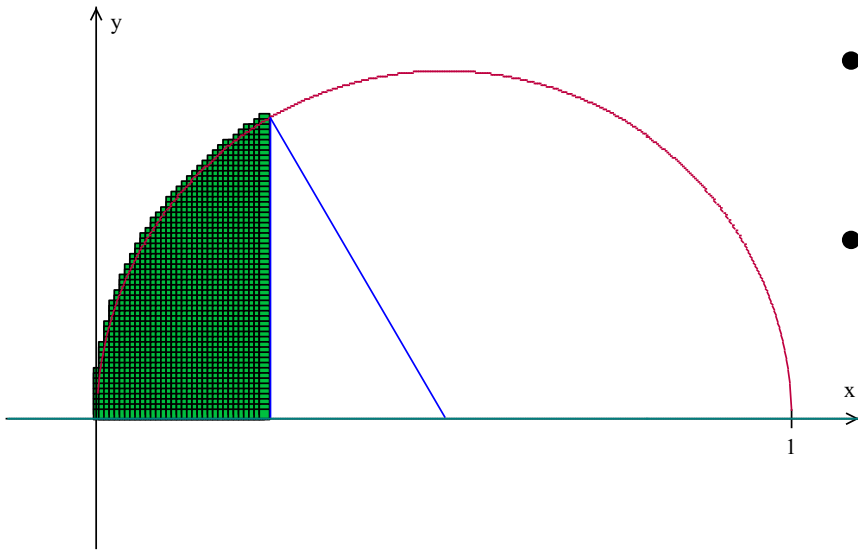
Part II. Newton's computations of “ π ”

- Circumference of a circle is “ $2\pi r$ ”.
- Area of a circle is “ πr^2 ”.
- **Locate circle** of radius $1/2$ with center at $(1/2, 0)$.
- **Equation for circle** is

$$y^2 = x(1 - x)$$
$$y = \sqrt{x} \sqrt{1 - x}$$



Newton's Estimate of “ π ”



- Use “series and polynomials” to estimate $y = \sqrt{x} \sqrt{1-x}$.
- Integrate “polynomials” to estimate area from 0 to $1/4$.
- Combine the area of the triangle from $1/4$ to $1/2$ to $(1/4, \sqrt{3}/4)$ with the shaded area under the circle from 0 to $1/4$ to cover the area of the central sector of $1/6$ th of circle. This gives an estimate of “ $\pi/24$ ” to 16 places!

Use of “Polynomials” and Integration

Polynomials used for $\sqrt{1-x}$: (Binomial Series)

$$\sqrt{1-x}: 1 - \frac{x}{2} - \frac{x^2}{8} - \frac{x^3}{16} - \frac{5x^4}{128} - \frac{7x^5}{256} - \dots$$

$$\sqrt{x} \sqrt{1-x}: x^{1/2} - \frac{x^{\frac{3}{2}}}{2} - \frac{x^{\frac{5}{2}}}{8} - \frac{x^{\frac{7}{2}}}{16} - \frac{5x^{\frac{9}{2}}}{128} - \frac{7x^{\frac{11}{2}}}{256} \dots$$

Now integrate to obtain:

$$\frac{2x^{\frac{3}{2}}}{3} - \frac{x^{\frac{5}{2}}}{5} - \frac{x^{\frac{7}{2}}}{28} - \frac{x^{\frac{9}{2}}}{72} - \frac{5x^{\frac{11}{2}}}{704} - \frac{7x^{\frac{13}{2}}}{1664} \dots$$

And for area of region under circle evaluate at $\frac{1}{4}$:

$$\frac{2(\frac{1}{2})^3}{3} - \frac{(\frac{1}{2})^5}{5} - \frac{(\frac{1}{2})^7}{28} - \frac{(\frac{1}{2})^9}{72} - \frac{5(\frac{1}{2})^{11}}{704} - \frac{7(\frac{1}{2})^{13}}{1664} = \frac{1}{12} - \frac{1}{160} \dots$$

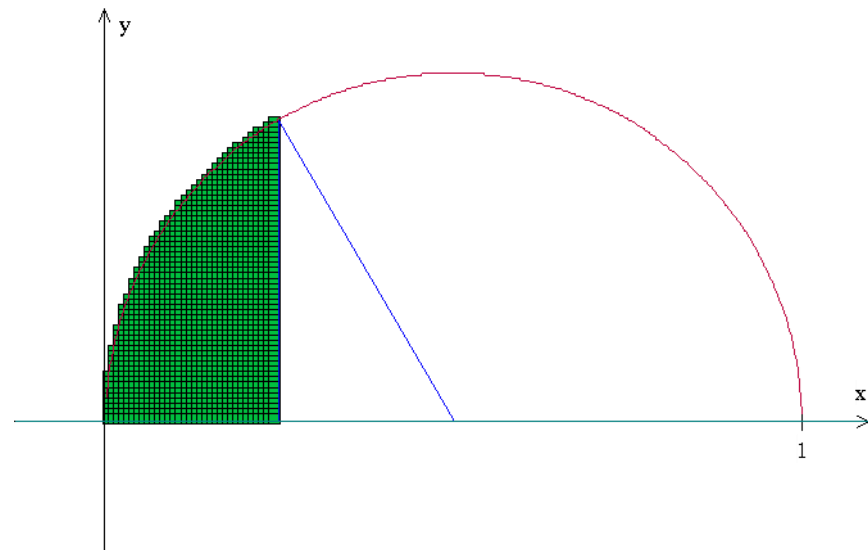
Finale for Newton's estimate of “ π ”

Area of Triangle: $\frac{\sqrt{3}}{32}$.

Area of central sector:
 $\frac{1}{6}th$ of circle of radius $\frac{1}{2}$

Area of circle (radius $\frac{1}{2}$) \approx

$$6 \left(\frac{\sqrt{3}}{32} + \frac{1}{12} - \frac{1}{160} - \dots \right)$$



Circumference of circle (radius $\frac{1}{2}$) = 4Area (= π)

$$\approx \textbf{(Newton)}(4)[6 \left(\frac{\sqrt{3}}{32} + \frac{1}{12} - \frac{1}{160} - \dots \right)] =$$

3.1415926535897928

Comparison

π from Newton:

3.14159265358979**28**

π from calculator:

3.14159265358979**323846**
26433832795

From Newton

From Newton, *Of the Method of Fluxions and Infinite Series* , pp 130-131.

[Newton_on PI.pdf](#)

the terms thus reduced by degrees, I dispose into Two Tables; the affirmative terms in One, and the Negative in Another, and add them up as you see here.

+	0.083333333333333	—	0.0002790178571429
	625000000000000		34679066051
	271267361111		834465027
	5135169396		26285354
	144628917		961296
	4954581		38676
	190948		1663
	7963		75
	352		4
	16		
	1		
			0.0002825719389575
			+ 0.0896109885646618
	0.0896109885646618		
			0.0893284166257043

Then from the sum of the affirmative, I take the sum of the negative terms, and there remains 0.0893284166257043 for the quantity of the Hyperbolick Area AdB which was to be found.

Let the Circle AdF [See the same Fig.] be proposed, which is expressed by the equation $\sqrt{x-xx}=z$, whose diameter is unity; and from what goes before its Area AdB will be $\frac{2}{3}x^{\frac{3}{2}} - \frac{1}{5}x^{\frac{5}{2}} - \frac{1}{7}x^{\frac{7}{2}} + \frac{1}{9}x^{\frac{9}{2}}$, &c. in which series, since the terms do not differ from the terms of the series which above expressed the Hyperbolick Area, except in the signs + and —; nothing else remains to be done, than to connect the same numeral terms with their signs; that is, by subtracting the connected sums of both the forementioned Tables, 0.0898935605036193, from the first term doubled 0.1666666666666666, &c. and the remainder 0.0767731061630473 will be the portion AdB of the Circular Area, supposing AB to be a fourth

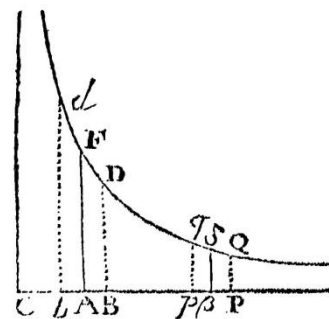
part of the Diameter. And hence we may observe, that though the Areas of the Circle and Hyperbola are not expressed in a Geometrical consideration, yet each of them is discovered by the same Arithmetical computation.

The portion of the Circle AdB being found, from thence the whole Area may be derived. For the radius dC being drawn, multiply Bd or $\frac{1}{4}\sqrt{3}$ into BC or $\frac{1}{4}$, and one half of the product $\frac{1}{8}\sqrt{3}$, or 0.0541265877365275 will be the value of the Triangle CdB ; which added to the Area AdB , will give the Sector ACd , 0.1308996938995747; the Sextuple of which 0.7853981633974482 is the whole Area.

And hence (by the way) the length of the Circumference will be 3.1415926535897928, which is found by dividing the Area by a fourth part of the diameter.

To this we shall add the calculation of the Area comprehended between the Hyperbola dFD and its

Asymptote CA , let C be the center of the Hyperbola, and putting $CA=a$, $AF=b$, and $AB=Ab=x$; it will be $\frac{ab}{a+x} = BD$, and $\frac{ab}{a-x} = bd$; whence the Area $AFDB = bx - \frac{bxx}{2a} + \frac{bx^3}{3a^2} - \frac{bx^5}{5a^4}$, &c. And the



Area $AFdb = bx + \frac{bx^2}{2a} + \frac{bx^3}{3a^2} + \frac{bx^5}{5a^4}$, &c. And the sum $bdDB = 2bx + \frac{2bx^3}{3a^2} + \frac{2bx^5}{5a^4} + \frac{2bx^7}{7a^6}$, &c. Now let us suppose $CA=AF=1$, and Ab or $AB=\frac{1}{4}$, Cb being = 0.9, and $CB=1.1$. then substituting

S 2

ing

7903	352	4
	16	
	1	
0.0896109885646618	+ 0.0002825719389575	
	+ 0.0896109885646618	
	0.0893284166257043	

Then from the sum of the affirmative, I take the sum of the negative terms, and there remains 0.0893284166257043 for the quantity of the Hyperbolick Area AdB which was to be found.

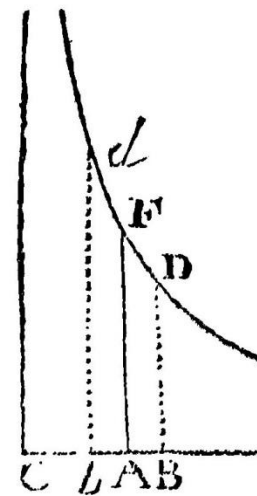
Let the Circle AdF [See the same Fig.] be proposed, which is expressed by the equation $\sqrt{x-xx}=z$, whose diameter is unity; and from what goes before its Area AdB will be $\frac{2}{3}x^{\frac{3}{2}} - \frac{1}{5}x^{\frac{5}{2}} + \frac{1}{7}x^{\frac{7}{2}} - \frac{1}{9}x^{\frac{9}{2}}$, &c. in which series, since the terms do not differ from the terms of the series which above expressed the Hyperbolick Area, except in the signs $+$ and $-$; nothing else remains to be done, than to connect the same numeral terms with their signs; that is, by subtracting the connected sums of both the forementioned Tables, 0.0898935605036193, from the first term doubled 0.1666666666666666, &c. and the remainder 0.0767731061630473 will be the portion AdB of the Circular Area, supposing AB to be a fourth part

will give the Sector Area, which multiplied by 6 will give the Sextuple of which 0.78539816 is the whole Area.

And hence (by the way) the length of the circumference will be 3.14159265358979 is found by dividing the Area by a fourth part of the diameter.

To this we shall add the calculation of the Area comprehended between the Hyperbola

Asymptote CA , let C be the center of the Hyperbola, and putting $CA=a$, $AF=b$, and $AB=Ab=x$; it will be $\frac{ab}{a+x} = BD$, and $\frac{ab}{a-x} = bd$; whence the Area $AFDB = bx - \frac{bxx}{2a} + \frac{bx^3}{3a^2} - \frac{bx^4}{4a^3}$, &c. And the



$$\text{Area } AFdb = bx + \frac{bx^2}{2a} + \frac{bx^3}{3a^2} + \frac{bx^4}{4a^3}$$

$$\text{sum } bdDB = 2bx + \frac{2bx^3}{3a^2} + \frac{2bx^5}{5a^4} + \frac{2bx^7}{7a^6}$$

let us suppose $CA=AF=1$, and AB being $=0.9$, and $CB=1.1$. the

us reduced by degrees, I dispose into
the affirmative terms in One, and the
Another, and add them up as you

333333333333	— 0 . 0002790178571429
500000000000	34679066051
271267361111	834465027
5135169396	26285354
144628917	961296
4954581	38676
190948	1663
7963	75
352	4
16	
1	0 . 0002825719389575
	+ 0 . 0896109885646618
109885646618	0 . 0893284166257043

the sum of the affirmative, I take the
negative terms, and there remains
4166257043 for the quantity of the
Area AdB which was to be found.

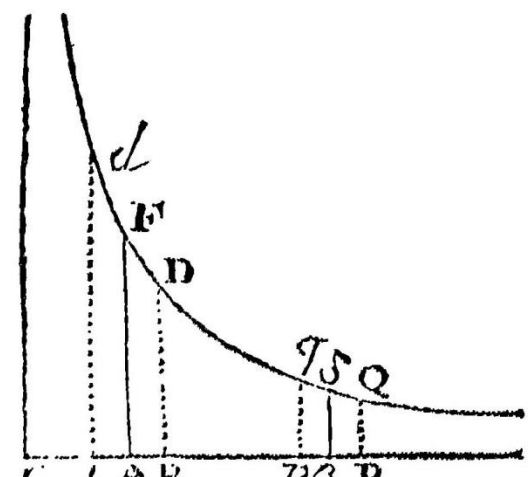
Circle AdF [See the same Fig.] be
which is expressed by the equation
whose diameter is unity; and from
before its Area AdB will be $\frac{2}{3}x^{\frac{1}{2}} - \frac{1}{5}x^{\frac{5}{2}}$
 $\frac{1}{2}x^{\frac{2}{2}}$, &c. in which series, since the terms
fer from the terms of the series which
ressed the Hyperbolick Area, except in

part of the Diameter. And hence we may ob-
serve, that though the Areas of the Circle and
Hyperbola are not expressed in a Geometrical consi-
deration, yet each of them is discovered by the
same Arithmetical computation.

The portion of the Circle AdB being found, from
thence the whole Area may be derived. For the ra-
dius dC being drawn, multiply Bd or $\frac{1}{4}\sqrt{3}$ into BC
or $\frac{1}{4}$, and one half of the product $\frac{1}{2}\sqrt{3}$, or
 0.0541265877365275 will be the value of the
Triangle CdB ; which added to the Area AdB ,
will give the Sector ACd , 0.1308996938995747 ;
the Sextuple of which 0.7853981633974482
is the whole Area.

And hence (by the way) the length of the Cir-
cumference will be 3.1415926535897928 , which
is found by dividing the Area by a fourth part of
the diameter.

To this we shall add the calculation of the Area
comprehended between the Hyperbola dFD and its
Asymptote CA , let C
be the center of the Hy-
perbola, and putting
 $CA=a$, $AF=b$, and
 $AB=Ab=x$; it will be
 $\frac{ab}{a+x} = BD$, and $\frac{ab}{a-x}$
 $=bd$; whence the Area
 $AFDB = bx - \frac{bx^2}{2a} + \frac{bx^3}{3a^2}$



Analysis of Computation

1. Use of binomial series polynomials to estimate $\sqrt{1-x}$ Then multiplied by \sqrt{x} .
2. Integration of “series ... polynomials”.
3. Geometry and algebra to decompose and recover estimates.
4. Algebra of geometric areas:
Area of sector = area of triangle + area under circle.

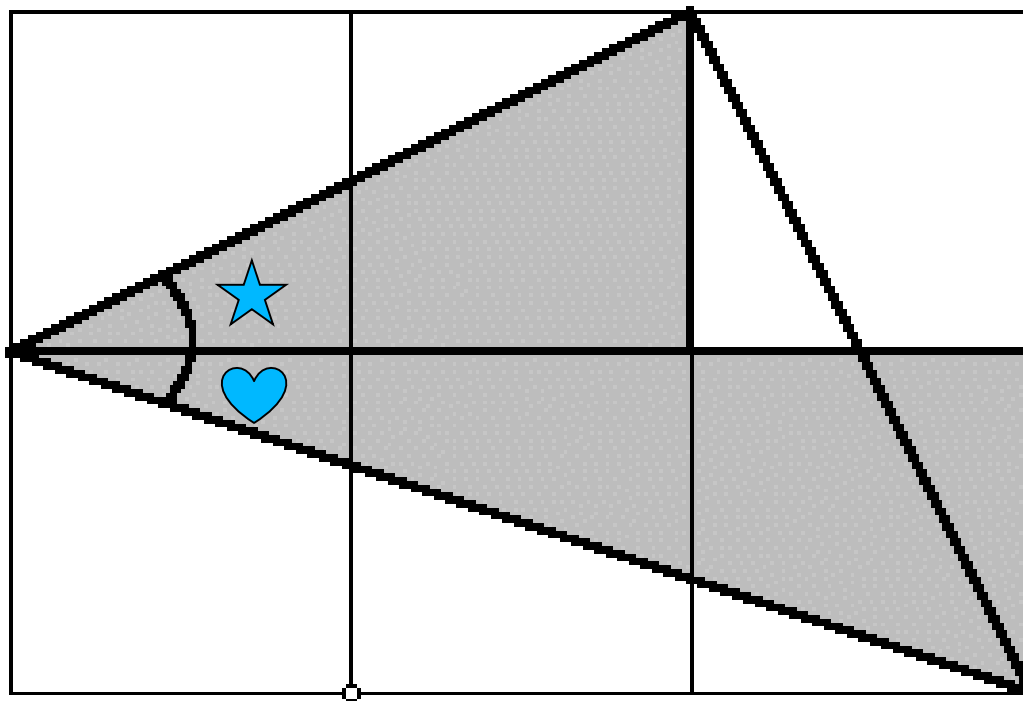
Part III.

Newton's logarithmic scheme for computations applied to estimating “ π ” .
Basic Scheme:

- Use polynomials as geometric series for $\frac{1}{1+x^2}$.
- Integration of $\frac{1}{1+x^2}$ polynomials gives polynomial for $\arctan(x)$.
- Use values “close to 0.”
 - $\arctan(1/2)$; $\arctan(1/3)$
- Use addition reductions.

$$\arctan\left(\frac{1}{2}\right) + \arctan\left(\frac{1}{3}\right) = \frac{\pi}{4}.$$

$$\arctan\left(\frac{1}{2}\right) + \arctan\left(\frac{1}{3}\right) = \frac{\pi}{4}$$



Note on Other Estimates of π

John Machin (1706-**Jones**) : 100 places

William Shanks (1873): 707 places- 527 correct!

$$4\arctan\left(\frac{1}{5}\right) - \arctan\left(\frac{1}{239}\right) = \frac{\pi}{4}.$$

Euler: adopted π as a symbol.

Developed other equations for estimation such as

$$5\arctan\left(\frac{1}{7}\right) + 2\arctan\left(\frac{3}{79}\right) = \frac{\pi}{4}$$


Current best (?): Alexander J. Yee & Shigeru
Kondo (August 2, 2010) 5 trillion places.

Exercise for Calculus

Apply the analysis from Newton's estimate for $\ln(2)$ to create an estimate for " π " from the arctan identity...

Estimate of “ π ” with Excel

k	n=2k-1	$(-1)^{(k+1)}x^n/n \quad x=1/2$	$(-1)^{(k+1)}x^n/n \quad x=1/3$
1	1	0.500000000000000000000000	0.3333333333333333000000
2	3	-0.0416666666666667000000	-0.0123456790123457000000
3	5	0.006250000000000000000000	0.000823045267489712000
4	7	-0.0011160714285714300000	-0.000065321052975374000
5	9	0.000217013888888889000	0.000005645029269476760
6	11	-0.000044389204545454500	-0.000000513184479043342
7	13	0.000009390024038461540	0.000000048248113414331
8	15	-0.000002034505208333330	-0.000000004646114625084
9	17	0.000000448787913602941	0.000000000455501433832
10	19	-0.000000100386770148026	-0.000000000045283768276
11	21	0.000000022706531343006	0.000000000004552336493
12	23	-0.000000005183012589164	-0.000000000000461831238
13	25	0.000000001192092895508	0.0000000000000047209415
14	27	-0.000000000275947429516	-0.0000000000000004856936
15	29	0.000000000064229143077	0.0000000000000000502442
	Estimate	0.463647609012972000000	0.321750554396642000000
	arctangent	0.463647609000806000000	0.321750554396642000000
		pi estimate = 4(atan(1/2)+atan(1/3))	3.14159265363846
		pi	3.14159265358979

The End

Questions?

flashman@humboldt.edu

Miscellaneous

Another reference: Logarithms: The Early History of a Familiar Function

by Kathleen M. Clark (Florida State University) and Clemency Montelle (University of Canterbury)

<http://mathdl.maa.org/mathDL/46/?pa=content&sa=viewDocument&nodeId=3495&bodyId=3845>

